



**SALWAN PUBLIC SCHOOL**  
**Sector-15 (II)**  
**Gurugram**

***Holiday Homework***

**2018-19**

***SERVICE BEFORE SELF***

**Class –V**

Dear Parent,

Season's Greetings!

Holidays are welcomed by all as they give a short break from routine life and help recoup health and viability. We have announced our Summer Vacation from May 13, 2018; this definitely comes along with the 'Holiday Homework'!

Our Holiday Homework has been carefully planned to target the various interests and learning styles of our students. Based on Gardner's theory of Multiple Intelligence, the activities will not only appeal students but also engage them in learning effectively.

Here is what the students need to do:

- Wake up early and practice Yoga/Simple exercises.
- Read newspaper every morning.
- Drink lots of water and avoid aerated drinks.
- Try drinking lemonade, jaljeera, aam panna and coconut water this season.
- Consume vegetables and fruits that have good water content.
- Help your parents keeping the house clean, filling water bottles to be kept in refrigerator and laying table for meals.
- Utilise lazy afternoons reading supplementary reader 'The Magic Faraway Tree' (Chapters 1-10); enjoy doing activities enclosed and submit them on the day of rejoining.
- To enhance your mental agility, do the Mathematics assignment sheets enclosed.
- Make a folder by using waste material and submit all your homework in the folder.

**Given below are a few suggested sites for children's book, for your reference.**

- <http://www.magickeys.com/books/>
- <https://www.storyjumper.com/book/search>
- [www.yesterdaysclassics.com/previews/baldwin\\_fifty\\_preview.pdf](http://www.yesterdaysclassics.com/previews/baldwin_fifty_preview.pdf)
- <https://www.tell-a-tale.com/10-short-panchatantra-stories-must-read-4-6-year-old-kids/>

We are looking forward to children coming back to school after rejuvenating holidays **on 2<sup>nd</sup> July 2018**, with smiling faces and joy in their hearts.

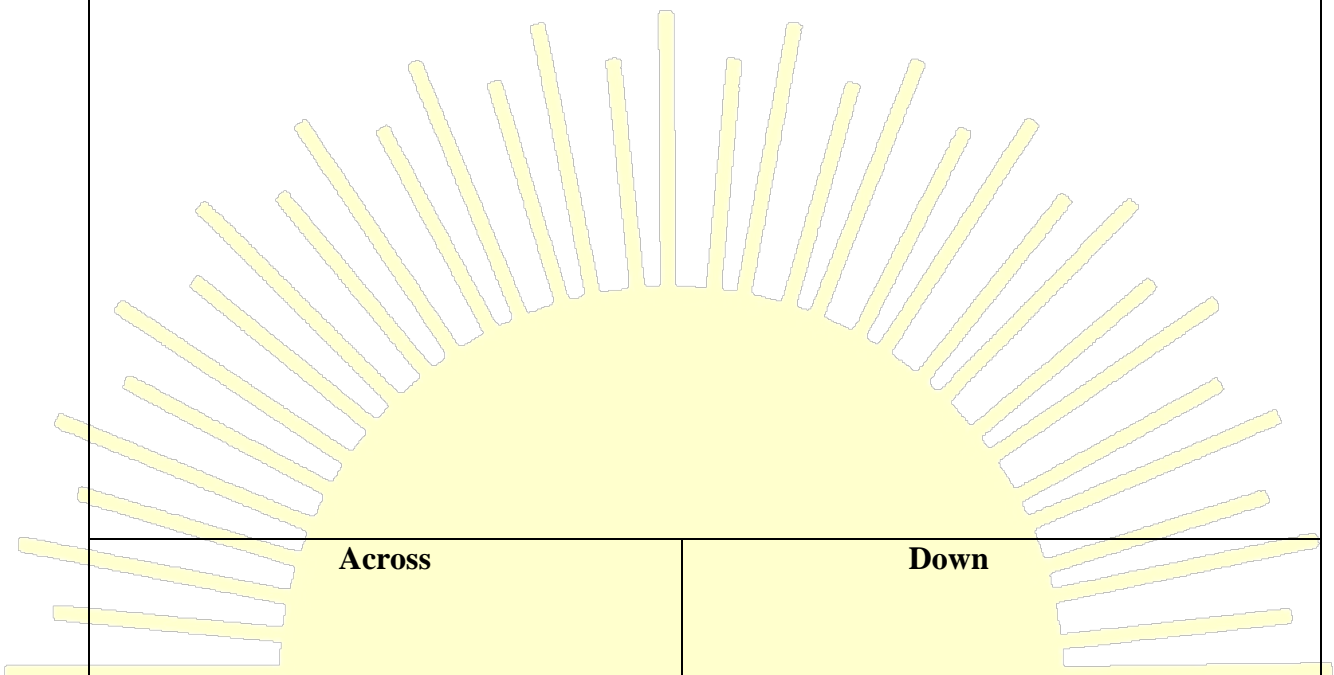
We wish you abundance, happiness, peace and a session filled with hope. All of us at SPS, Gurgaon wish you the best of holidays.

Regards

Team SPS



**Create your own Cross word Puzzle:**



**Across**

**Down**

*SERVICE BEFORE SELF*

**Activity 2 (Linguistic Intelligence)**

**Pick up EIGHT phrases from the book and frame sentences using them:**

**Example:**

a quiet place

I am looking for a quiet place to read my favourite book.

\_\_\_\_\_

\_\_\_\_\_

\_\_\_\_\_

\_\_\_\_\_

\_\_\_\_\_

\_\_\_\_\_

\_\_\_\_\_

\_\_\_\_\_

\_\_\_\_\_

*SERVICE BEFORE SELF*

\_\_\_\_\_

\_\_\_\_\_

\_\_\_\_\_

\_\_\_\_\_

**Activity 3 (Interpersonal Intelligence)**

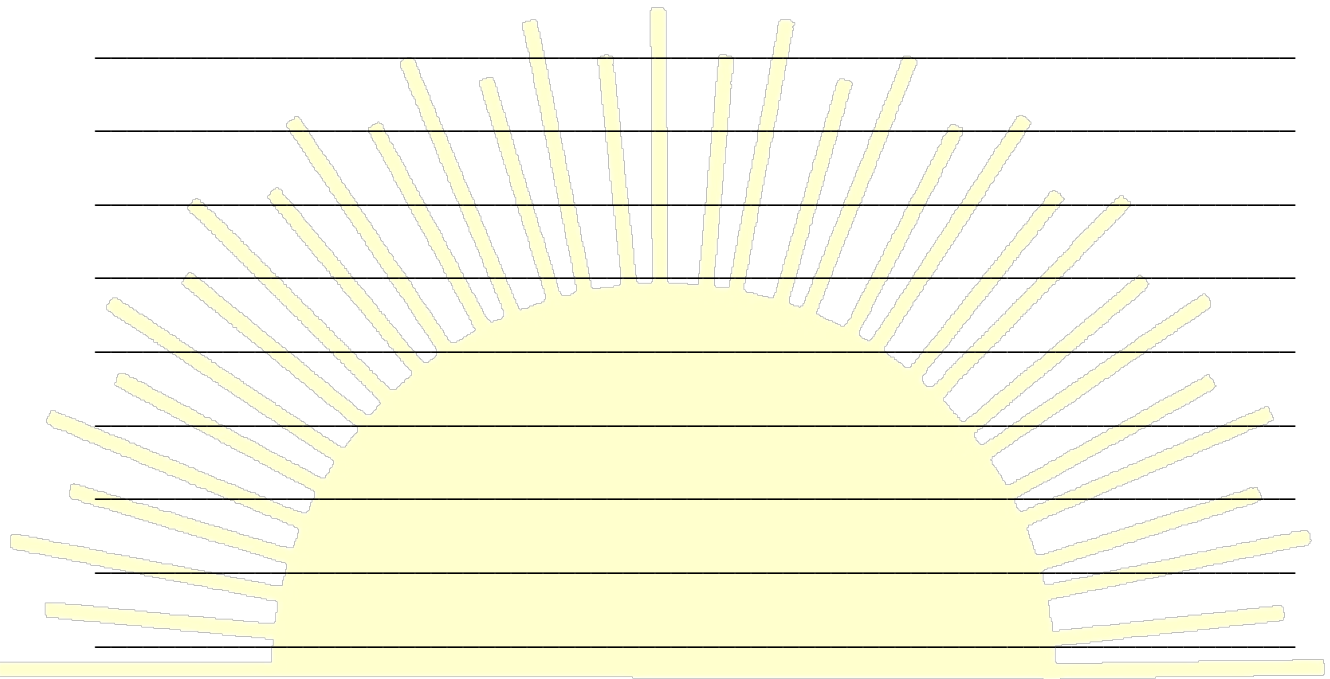
**Imagine yourself as Rick of the story, 'The Magic Faraway Tree' and write your experience of visiting the Enchanted Woods in not more than 100 words.**

**(Autobiography)**

---

---

---



*SERVICE BEFORE SELF*

---

---

---

---

---

---

---

**Activity 4 (Naturalistic Intelligence)**

**If you would have been in Topsy-Turvy land, what all difficulties would you have faced? Mention any four.**

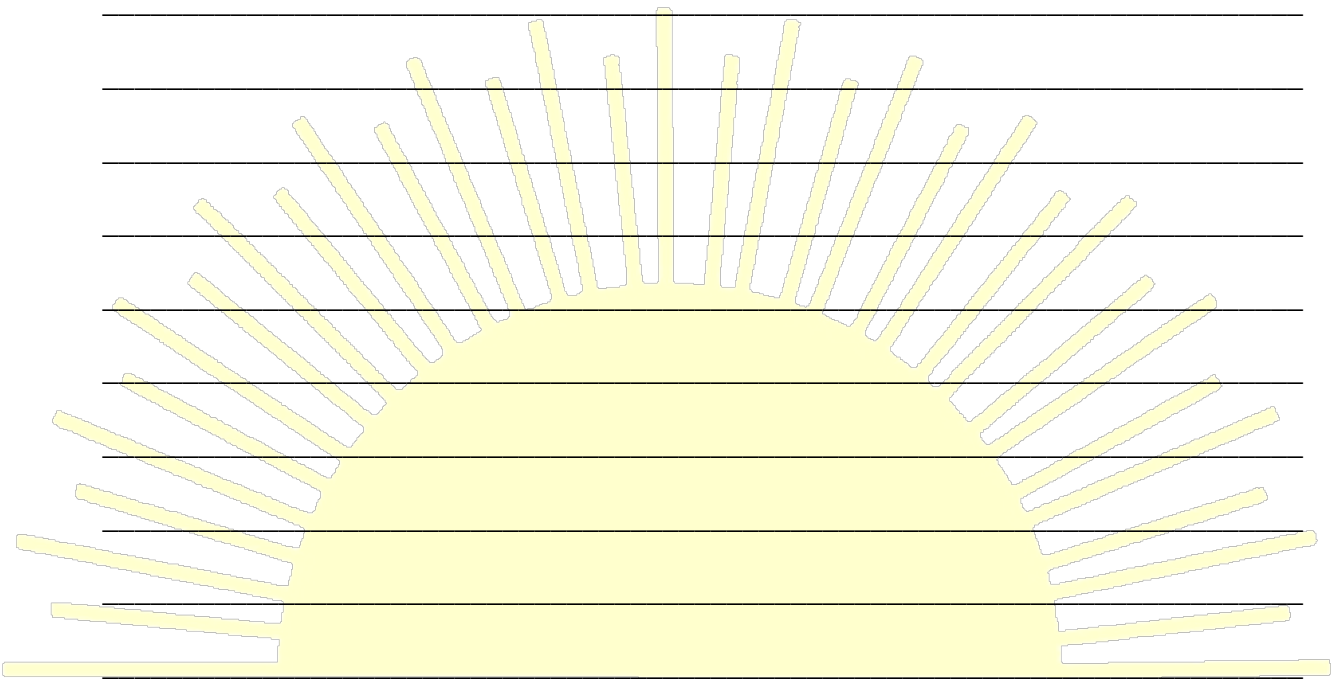
---

---

---

---


---



**SERVICE BEFORE SELF**  
If you could climb a ladder up into the clouds, what magic land would you find up there? Draw your picture and write your Magic Land's name.

**Activity 5 (Visual Spatial Intelligence)**

**Illustrate your favourite scene from the story.**



*SERVICE BEFORE SELF*



## गतिविधि - 6

- 1 सुलेख के 10 पेज करें। ( व्याकरण कॉपी में करें )
- 2 एक से सौ तक (1 - 100) तक की गिनती याद करें।
- 3 प्रवाह संचित्र (Flow Chart) ग्रीष्मवाकाश कार्य

### आवश्यक निर्देश

- प्रेमचंद द्वारा ईदगाह या दो बैलो की कथा कोई एक कहानी पढ़ें ।
- कहानी पढ़ने के बाद नीचे दिए गए मुख्य बिन्दुओं पर आधारित प्रवाह संचित्र(Flow Chart) बनाएँ।
- सम्पूर्ण कार्य A4 आकार के पृष्ठ पर रंगों का सुंदर इस्तेमाल करते हुए आकर्षक रूप

कहानी व लेखक का नाम

कहानी में आए 15 नवीन शब्द छाँटिए

नवीन शब्द में से किन्हीं 10 शब्दों को वाक्य में प्रयोग  
कीजिए को वाक्य में प्रयोग

मुख्य पात्र - कहानी के मुख्य पात्र कौन-कौन से हैं ?  
उन सभी का नाम लिखिए ।

चारित्रिक विशेषताएँ - सभी पात्रों की चरित्र (Character)  
संबंधी विशेषताएँ लिखें ।

प्रिय संवाद - कहानी में आपको किस-किस पात्र का कौन -सा संवाद (dialogue) अच्छा लगा, उन्हें लिखिए । प्रिय संवाद तीन या चार से अधिक भी हो सकते हैं ।

कहानी का सारांश अपने शब्दों में लिखिए

प्रिय पात्र कहानी में आपका प्रिय पात्र कौन-सा है और क्यों ?

कहानी का आवरण पत्र (Cover page) तैयार करें

शिक्षा- कहानी से आपको क्या शिक्षा मिली ?

### Activity 7

Summer is the season of enjoying vacations with lots of drinks and fruits. Consume different flavoured drinks/squashes/juices and complete the table given below:

One has been done for you.

<b>The summer chillers I enjoyed</b>	<b>Nutrients</b>	<b>Other Sources</b>
Frooti	<ul style="list-style-type: none"><li>• Proteins</li><li>• Vitamin A</li></ul>	<ul style="list-style-type: none"><li>• soyabean, meat</li><li>• carrot, yellow fruits</li></ul>

SERVICE BEFORE SELF

### Activity 8

During this summer break, you must have planned a trip with your family either to your home town, hilly areas, coastal region, abroad or just spending special time with your loved ones.

Make an information leaflet of your trip starting from your present location to the planned destination.

**My journey from \_\_\_\_\_ to \_\_\_\_\_**

S. no	Details	From (City/Country)	To (City/Country)
1	the state where it is located		
2	distance between airport		
3	name 2-3 flights and their flight numbers		
4	their timings		
5	name of railway station		
6	names of 2-3trains		
7	their timings		
8	any bus service (if available)		
9	their bus stations		
10	their bus stations		

## Activity 9

### Do My Research!

‘Reading Newspaper is an Excellent Habit’

The ‘World Environment Day’ is celebrated on 5<sup>th</sup> June every year to spread awareness, to save the environment. Look into the newspapers and find out articles related to environment.

Read these articles and express your views through a poster on An A4 size sheet.

### Be an Explorer

You have read about many EXPLORERS. Here are few more. Collect information and fill the columns.

You may also research a few more and add to the given list.

First to:

**NAME**

**COUNTRY**

a. Reach the North Pole

b. Got into space

c. Walk on the moon

d. Reach the South Pole

e. Reach Amazon Basin

**SERVICE BEFORE SELF**



## Logical Reasoning

### Practice Sheet -2

1. If the pattern continues, what letter is in the 99<sup>th</sup> position?

X, Y, Z, Z, Y, X, X, Y, Z, Z, Y, X

a. X                      b. Y                      c. Z                      d. Can't be determined

2. Choose the odd numeral pair in the following

a. (2,8)                      b. (3, 27)                      c. (4, 32)                      d. (5, 125)

3. Garima ranked 7<sup>th</sup> in the class of 49 students from the top. What is her rank from bottom in the class?

a. 49<sup>th</sup>                      b. 46<sup>th</sup>                      c. 43<sup>rd</sup>                      d. 44<sup>th</sup>

4. Among a group of 6 girls, Shikha is shorter than Ayushi but taller than Ritu. Sonam is the shortest. Karuna is taller than Ritu but shorter than Payal. Payal is shorter than Shikha. Who is 3<sup>rd</sup> if the girls are arranged in the ascending order of heights?

a. Karuna                      b. Payal                      c. Ritu                      d. Shikha

5. Ajeet is fatter than Ranjeet who is thinner than Bhushan. Mohan is thinner than Ajeet but fatter than Bhushan. Two other men are fatter than Ajeet. Who is the thinnest ?

a. Ajeet                      b. Ranjeet                      c. Bhushan                      d. Can't be determined

6. In the number pattern \_\_\_\_\_, 8925, 6925, 4925, 2925. Find the missing number

a. 7925                      b. 9925                      c. 10295                      d. 10925

7. Which is the missing number below?

3	?	1
2	4	6
7	0	5

a. 6                      b. 7                      c. 8                      d. 9

8. In a certain code language BOARD is written as 51324 and SIDE is written as 9647. How will BASE be written in code language?

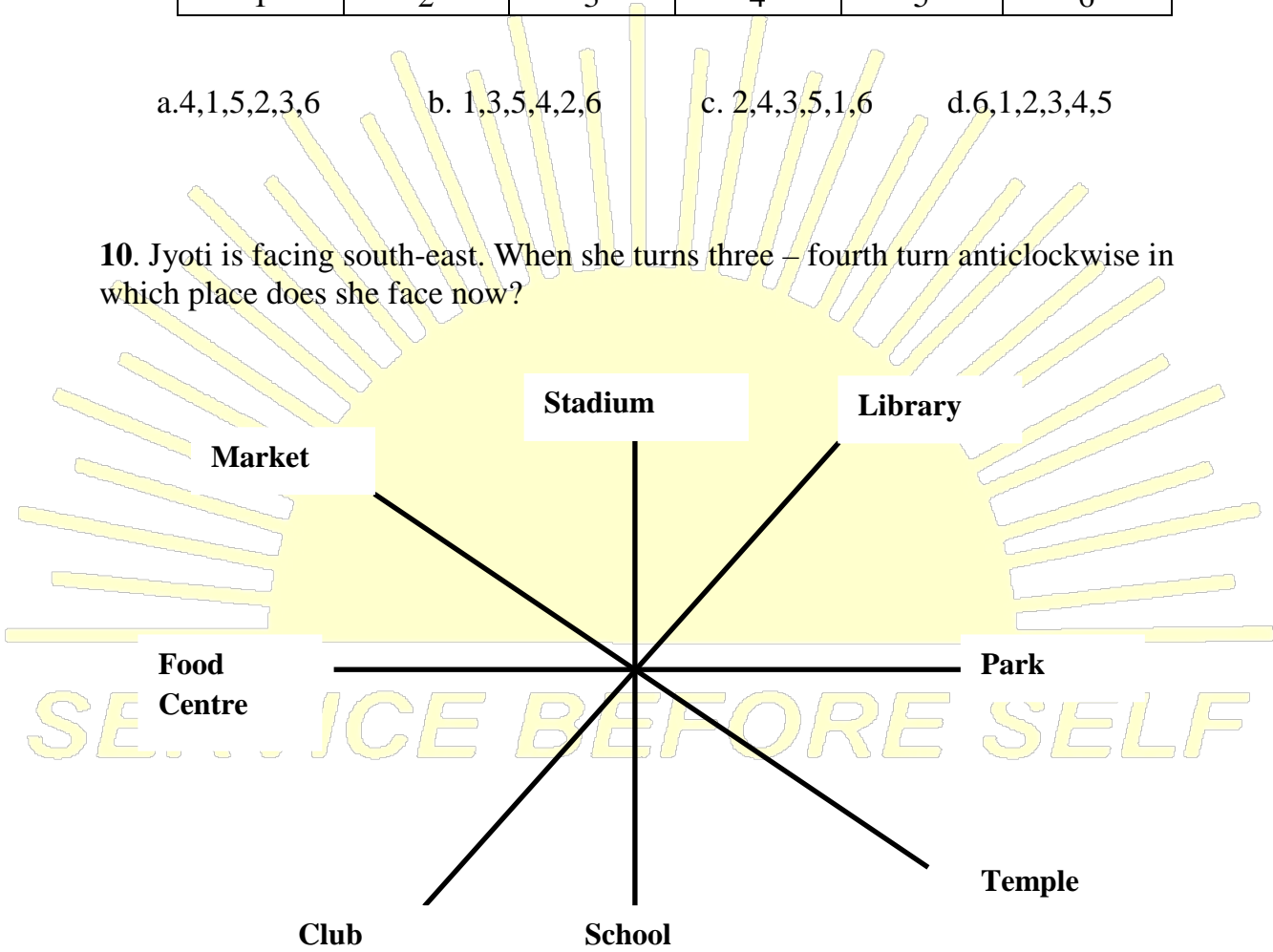
- a.5397      b.5937      c.5697      d.5297

9. Some letters are numbered as 1,2,3,4,5 and 6. Arrange the letters to form a meaningful word.

N	E	U	B	M	R
1	2	3	4	5	6

- a.4,1,5,2,3,6      b. 1,3,5,4,2,6      c. 2,4,3,5,1,6      d.6,1,2,3,4,5

10. Jyoti is facing south-east. When she turns three – fourth turn anticlockwise in which place does she face now?



- a. Park      b. Food centre      c. Stadium      d. Club



## Puzzle Time

### Practice Sheet -3

Q1. Fill the given crossword.

1	2		3		4	5	
6			7				
8		9				10	11
		12		13			
	14					15	
16						17	
18			19		20		
21					22		

#### Across

1.  $25 \times 91 =$

4.  $12 \times 60 =$

6.  $1 \times 18 =$

7.  $61 \times 25 =$

8.  $43 \times 60 =$

10.  $9 \times 9 =$

12.  $50 \times 41 =$

14.  $1 \times 18 =$

15.  $1 \times 17 =$

16.  $10 \times 53 =$

17.  $2 \times 45 =$

18.  $2 \times 25 =$

19.  $2 \times 539 =$

21.  $15 \times 139 =$

22.  $40 \times 15 =$

#### Down.

1.  $76 \times 28 =$

2.  $19 \times 15 =$

3.  $85 \times 60 =$

4.  $4 \times 18 =$

5.  $6 \times 43 =$

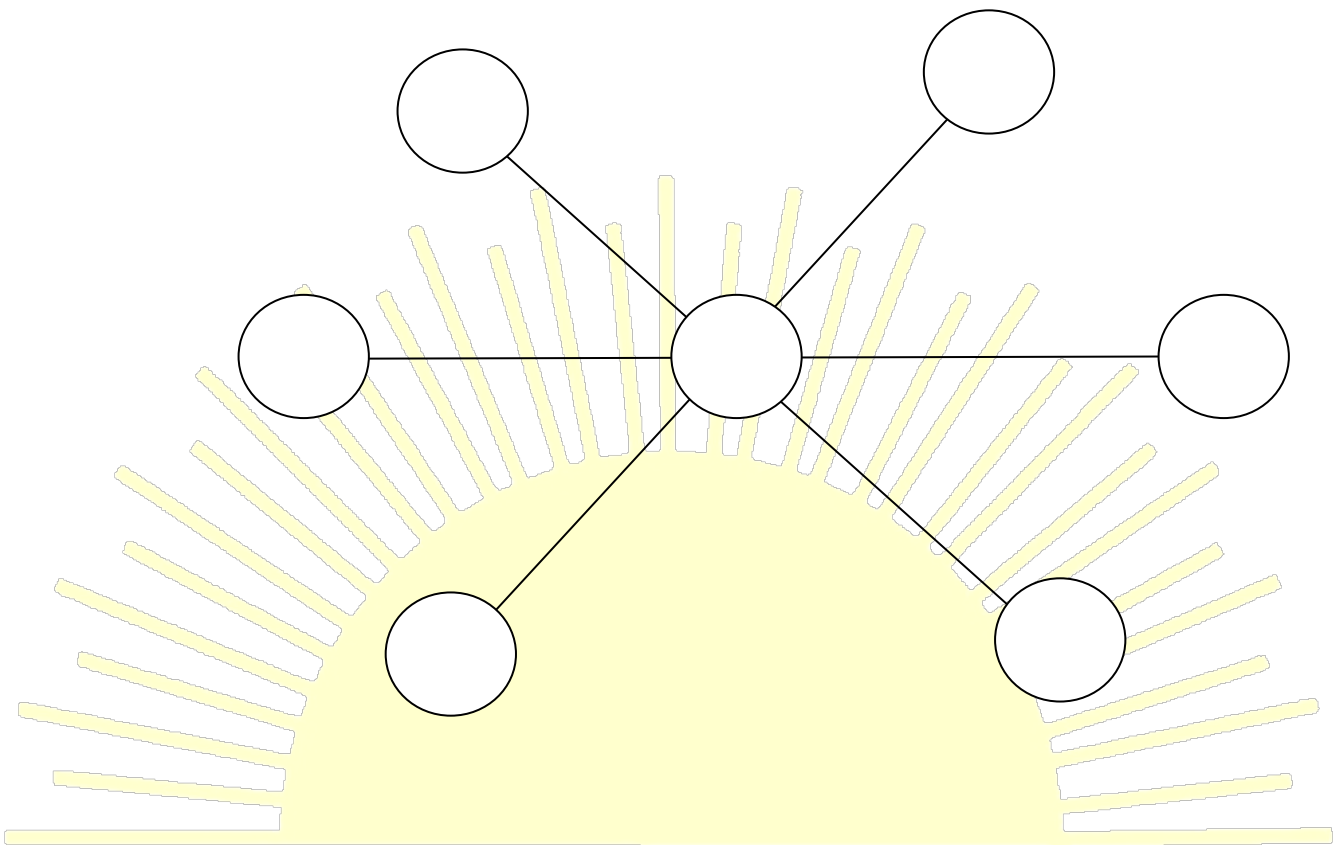
9.  $92 \times 90 =$

11.  $30 \times 49 =$

13.  $70 \times 79 =$

14.  $20 \times 65 =$

**Q2.** Put the number 1, 2, 3, 4, 5, 6, & 7 in the above circles so that each straight line of 3 numbers adds up to same total.

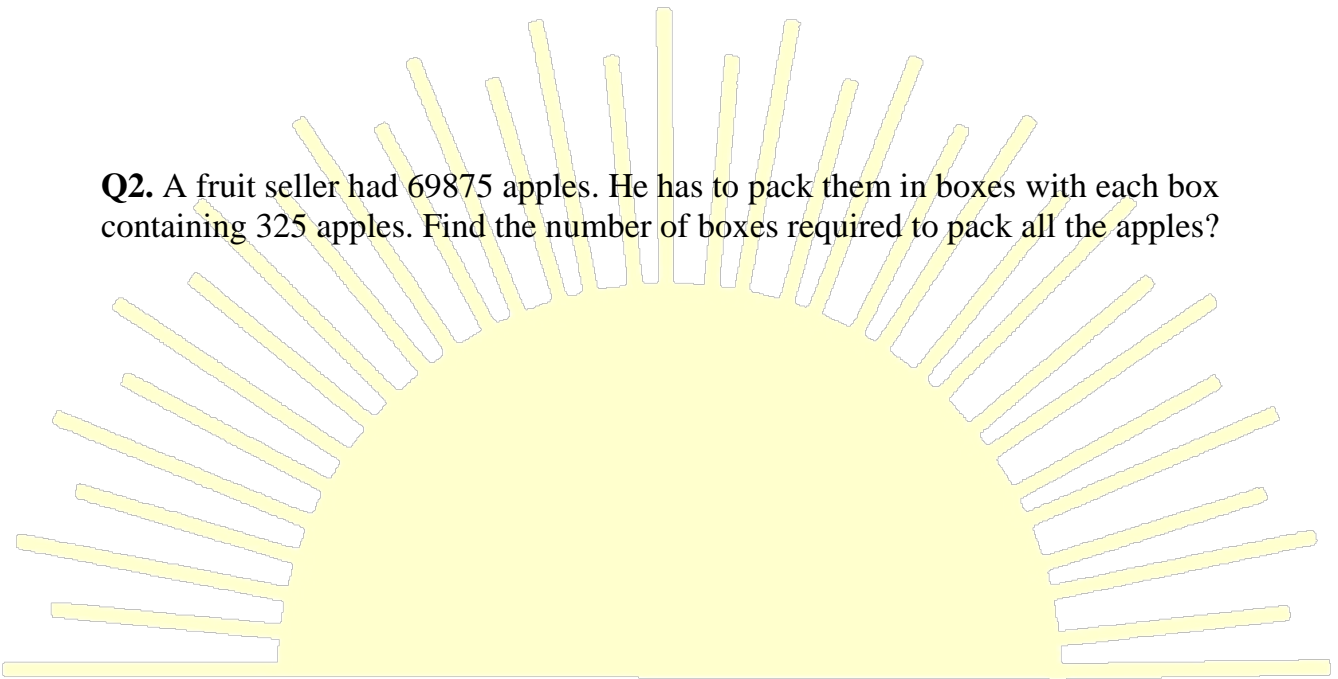


**Q3.** The product of 214 and a number is X. Taking 49 away from X gives 1449. Find the number.

### Practice sheet -4

**Q1.** In January there were 19450 passenger arrivals at a domestic airport. In February there were 26051 arrivals and in March there were 23910 arrivals. How many passenger arrivals were there in these 3 months. Round the answer to nearest 100.

**Q2.** A fruit seller had 69875 apples. He has to pack them in boxes with each box containing 325 apples. Find the number of boxes required to pack all the apples?



**Q3.** This mystery number has 4 digits. Every digit is an odd number. None of the digit is a 9. Every digit in the number is different. The smallest digit is in the thousands place. The greatest digit is in the ones place. We are now left with two possible numbers. The mystery number is the greater of those two numbers. What is the mystery number?

### Practice sheet -5

**Q1.** Mohit baked 2000 cookies. He sold 600 of them and gave the rest equally to 20 of his friends. How many of cookies did each of his friends will receive?

**Q2.** Machine A produces 7500 biscuits in a day which is 240 fewer biscuits than what machine B produces in a day. In one packet 20 biscuits are packed. If both machines A and B are used, how many packets of biscuits will be there after 7 days?



*SERVICE BEFORE SELF*

**Q3.** Rama is thinking of a 5 digit number. The number is a multiple of 5. The ten's place digit is the highest common factor of 16 and 24. The hundred's place digit is the smallest odd number. The ten thousand's place digit is an even prime number. The thousand's place digit is the third multiple of sum of ten thousand's place and hundred's place digit. There are only 2 even digits in the number. What number is Rama thinking of?

**Q4.** Write the largest & smallest number: ( using 7, 0, 3, 8, 5)

Number	Smallest Number	Largest Number
5-digit number		
6-digit number		
4-digit number		

*SERVICE BEFORE SELF*

**Q5.** Subtract the sum of greatest 7-digit number and 56789 from the sum of smallest 8 – digit number and 87,68,903.